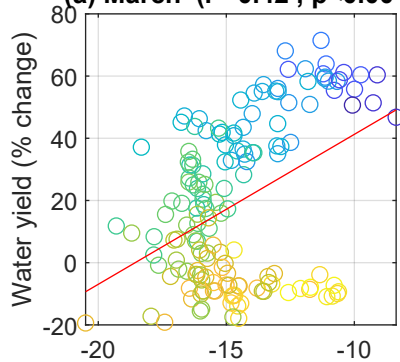
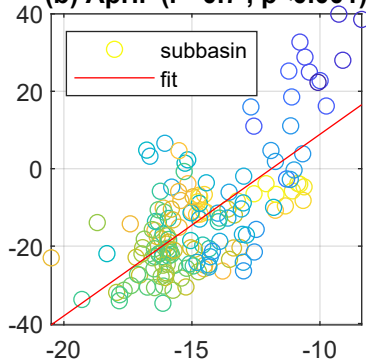


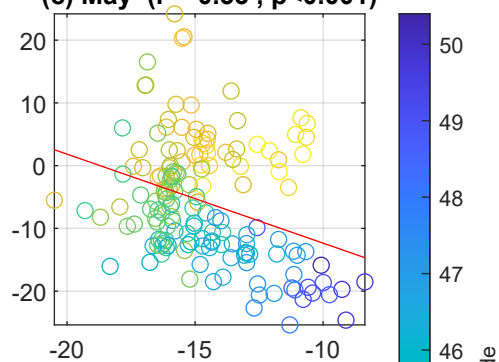
**(a) March ( $r = 0.42$ ,  $p < 0.001$ )**



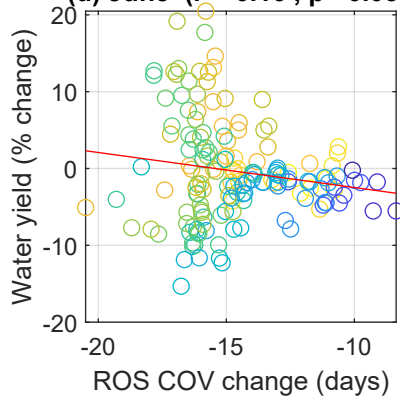
**(b) April ( $r = 0.7$ ,  $p < 0.001$ )**



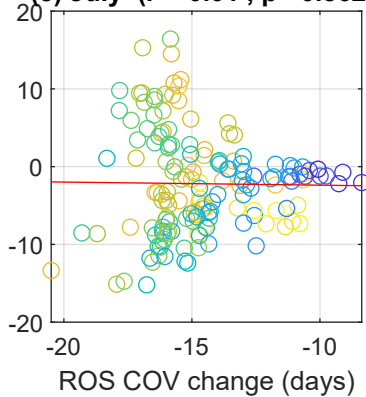
**(c) May ( $r = -0.33$ ,  $p < 0.001$ )**



**(d) June ( $r = -0.16$ ,  $p = 0.05$ )**



**(e) July ( $r = -0.01$ ,  $p = 0.862$ )**



**(f) August ( $r = -0.02$ ,  $p = 0.78$ )**

